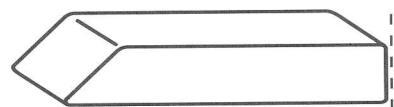


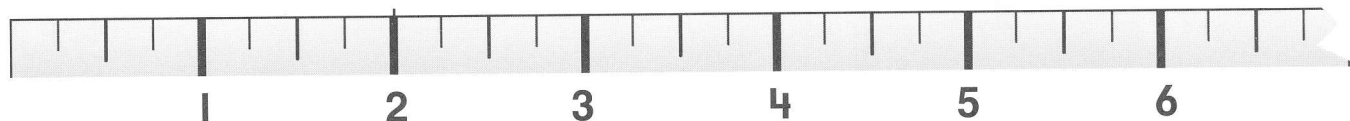
Name _____

Measure the length of the object.

1



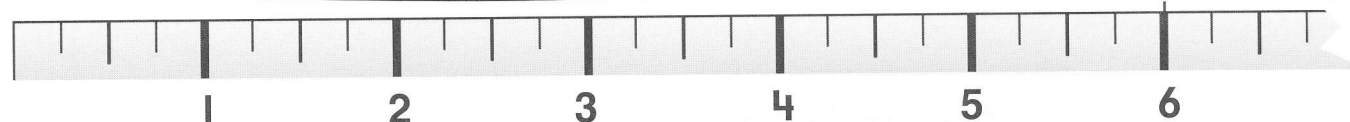
about _____ inches




2



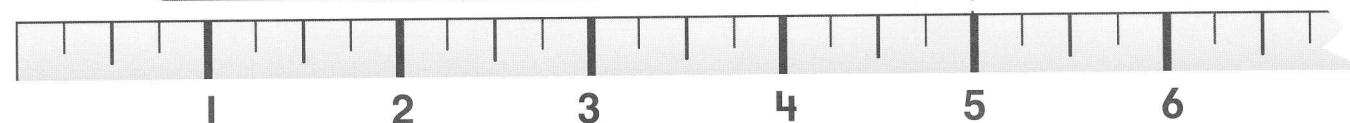
about _____ inches



3



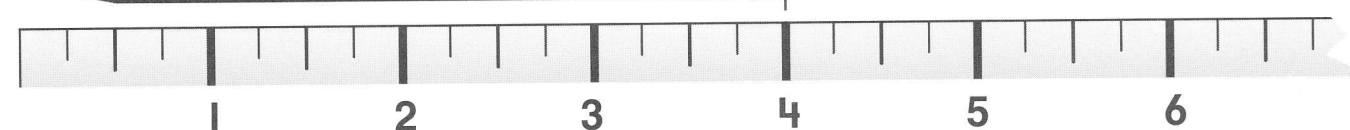
about _____ inches



4




about _____ inches



Tell how you know the length of the object.

Measure the length of the object in inches and in feet.

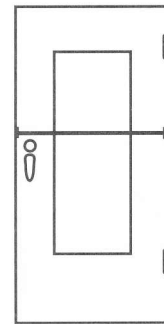
① a desk



about _____ inches

about _____ feet

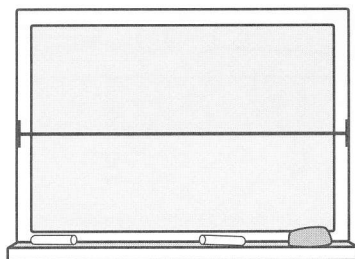
② a door



about _____ inches

about _____ feet

③ a board



about _____ inches

about _____ feet


④ a classmate



about _____ inches

about _____ feet

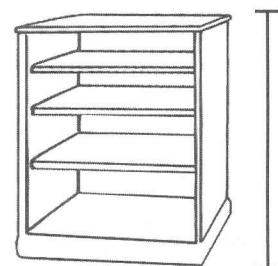
⑤ a table



about _____ inches

about _____ feet

⑥ a bookshelf



about _____ inches


about _____ feet



Tell how the two measurements relate to the size of the units.


Estimate the length of the object. Circle the unit. Then measure the object.

1 your pencil



estimate: about _____ inches/feet
measure: about _____ inches/feet

2 a table




estimate: about _____ inches/feet
measure: about _____ inches/feet

3 a crayon



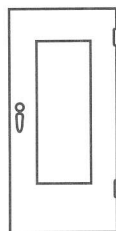
estimate: about _____ inches/feet
measure: about _____ inches/feet

4 a book




estimate: about _____ inches/feet
measure: about _____ inches/feet

5 a door



estimate: about _____ inches/feet
measure: about _____ inches/feet

6 a desk




estimate: about _____ inches/feet
measure: about _____ inches/feet

7 a classmate



estimate: about _____ inches/feet
measure: about _____ inches/feet

8 a window




estimate: about _____ inches/feet
measure: about _____ inches/feet



Tell how you know your estimate is reasonable.


Measure the objects to compare their lengths. Circle the unit.

- ① How much longer is this activity page than a crayon?



about _____ inches/feet

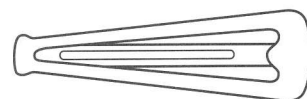
- ② How much longer is a table than your desk?



about _____ inches/feet

Circle the correct answer.

- ③ How much longer is the picture of the ribbon than the picture of the barrette?



- a) about 3 inches
- b) about 4 inches
- c) about 5 inches
- d) about 5 feet



Tell how you can use subtraction to compare lengths.